

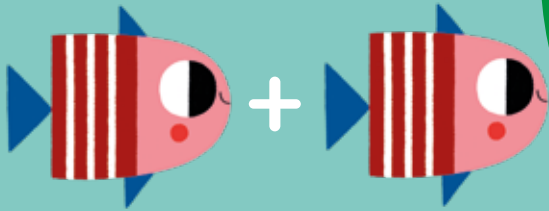


edebé




sumas simples



escribe • borra • repite

0 1 2 3 4 5 6 7 8 9 10



cero



uno



¿Cuántos unicornios hay?

$1 + 0 =$



Uno más cero es uno.



$+ 0 =$



$+ 0 =$





$0 +$



=



¿Cuántas manchas tiene?



$+ 0 =$



$0 +$



=



Une cada respuesta con su mariquita.

0 1 2 3 4 5 6 7 8 9 10




¿Cuántos leones ves? $1 + 1 =$



Uno más uno es dos.



$+ 1 =$



$+ 1 =$



$1 +$



$=$



$+$



$=$



$1 +$



$=$




Rodea la respuesta.



$+$



$=$





$+ 1 =$



0 1 2 3 4 5 6 7 8 9 10

tres





¿Cuántos búhos hay?


$2 + 1 =$

3


Dos más uno es tres.


 $+ 0 =$

 $+ =$


$2 +$  $=$

¿Cuántas flores hay?




 $+ 2 =$

$2 + 1 =$

$0 +$  $=$

Rodea la respuesta.

0 1 2 3 4 5 6 7 8 9 10




cuatro




¿Cuántos flamencos ves?

$3 + 1 =$



Tres más uno es cuatro.





$+ 0 =$



$+ 2 =$




$0 +$  $=$



$3 +$  $=$



$+$  $=$



+

=



Rodea la respuesta.